



Year 1 - End of Block Time

#MathsEveryoneCan

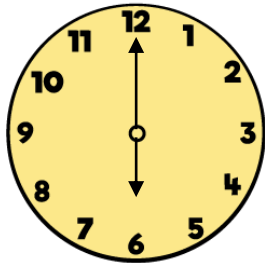
Match the times to the clocks.



five o'clock




six o'clock



nine o'clock

Circle the time shown on the clock.



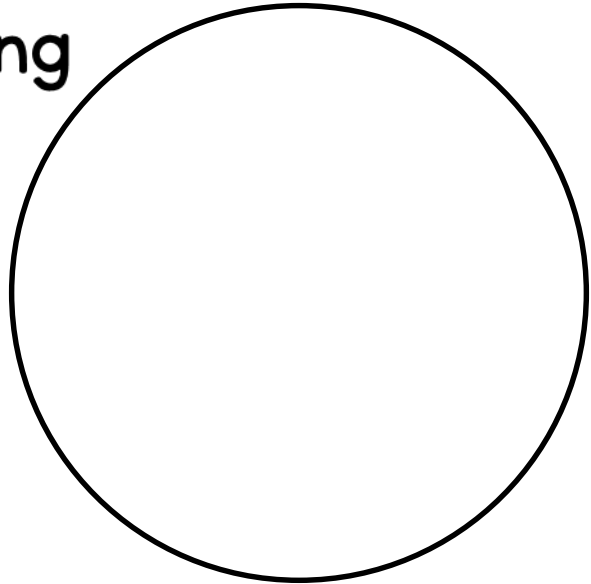
seven
o'clock

half past
seven

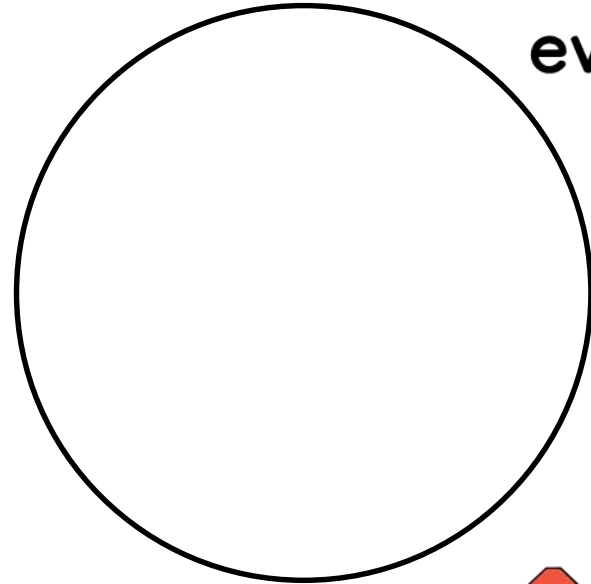
half past
six

Sort the activities into the groups.

morning



evening



bedtime



breakfast



go to school

Complete the missing days of the week.

Friday

Saturday

Sunday


Tuesday

Thursday

Today is Wednesday.

Sam is going to the zoo tomorrow.

What day is Sam going to the zoo?



Sam is going to the zoo on _____

Complete the sentences.

Use the words to help you.

My favourite film is about two _____ long.

I can write my name in three _____.

My favourite song is about 3 _____ long.

minutes

seconds

hours


Here are the times 3 children spent reading last week.

Teddy



45 minutes

Rosie



2 hours

Amir



54 minutes

Who read for the longest?