

Year 3

Place Value Assessment

Name _____



1 Anna has made a number.

Hundreds	Tens	Ones

What number has Anna made?

1 mark

Is the number odd or even?

How do you know?

1 mark

2 Circle the number that has the digit 7 in the tens column.

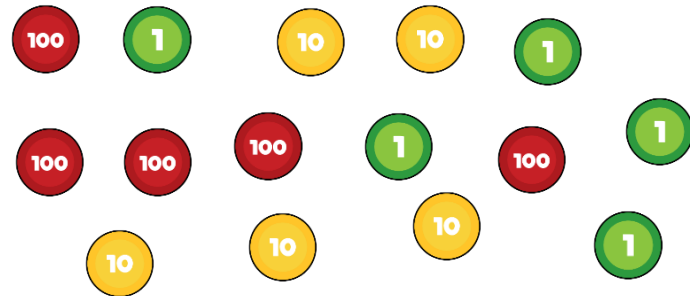
725 572 257

1 mark

3 Max is making a number using some counters. Max chooses 6 counters.

He makes a number greater than 300

Circle the counters Max could have chosen.



1 mark

4 Match the numbers.

Six hundred and six 676

Six hundred and sixty 606

Six hundred and seventy-six 660

2 marks

5 Complete the missing numbers.

255	265	275				
-----	-----	-----	--	--	--	--

2 marks

6 Here are some digit cards.



Max uses the cards to make a 3 digit number.
Write down all the numbers between 250 and 550 Max can make.

2 marks

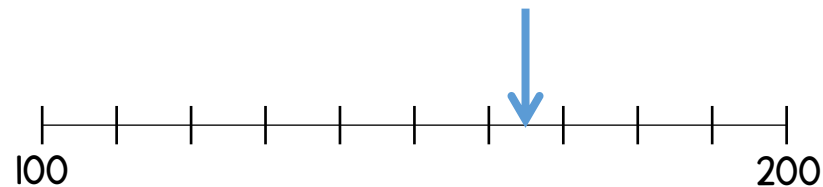
7 What is 100 less than 719? _____

What is 10 more than 97? _____

What is 10 less than 205? _____

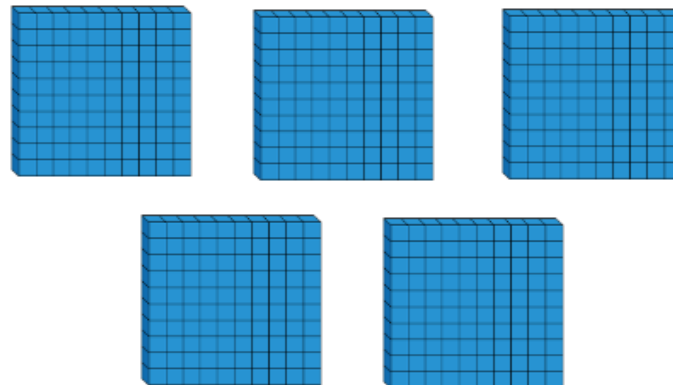
3 marks

8 What number is the arrow pointing to?



1 mark

9 How many tens are there in 500?



1 mark

Circle how confident you feel with place value.

1 2 3 4 5
Not Very
confident confident